



הכבשים נעלמו


$$6 + \underline{\quad\quad} = 11$$



$$7 + \underline{\quad\quad} = 12$$




$$8 + \underline{\quad\quad} = 15$$




הכבשים נעלמו

$$9 + \underline{\quad\quad} = 11$$



$$5 + \underline{\quad\quad} = 12$$




$$3 + \underline{\quad\quad} = 15$$




הכבשים נעלמו

$$9 + \underline{\quad\quad\quad} = 18$$



$$5 + \underline{\quad\quad\quad} = 14$$




$$3 + \underline{\quad\quad\quad} = 16$$




הכבשים נעלמו


$$12 + \underline{\quad\quad} = 18$$



$$6 + \underline{\quad\quad} = 17$$




$$6 + \underline{\quad\quad} = 20$$




הכבשים נעלמו


$$9 + \underline{\quad\quad\quad} = 18$$



$$5 + \underline{\quad\quad\quad} = 17$$




$$12 + \underline{\quad\quad\quad} = 20$$




הכבשים נעלמו

$$8 + \underline{\quad\quad\quad} = 19$$



$$4 + \underline{\quad\quad\quad} = 19$$



$$15 + \underline{\quad\quad\quad} = 18$$

